

Class: 3

Subject: Mathematics

Prepared by Shameema Akhtar

Date: 13 / 7/ 2020



Chapter: Bangladeshi coins and Notes

Lecture -1 notes




The taka is the currency of Bangladesh. The most commonly used symbol for the taka is TK and ৳ .

we will learn today how to find total amount.

For explanation watch video lecture -1 on this chapter.

Assess your learning

1. Make a list of Bangladeshi coins and notes.
2. Count the total amount and write down in your answer script.




a)	
	50 paisa
b)	
	50 paisa
c)	
	10 paisa
d)	
	10 paisa and 50 paisa
e)	
	5 paisa

Class: 3

Subject: Mathematics

Prepared by Shameema Akhtar

Date: 13 / 7/ 2020

f)	
10 taka and 50 paisa	
g)	
100 taka , 10 taka, 10 paisa and 50 paisa	
h)	
1000 taka , 100 taka, 20 taka,10 taka ,50 paisa,and 5 paisa	

3. With the help of picture, fill the gaps with the correct words or numbers.




a)		___ coins of 50 paisa is equals to ___ taka.
b)		___ notes of 10 taka is equals to ___ taka.

Class: 3

Subject: Mathematics

Prepared by Shameema Akhtar

Date: 13 / 7/ 2020

c)		___ notes of 20 taka is equals to ___ taka.
d)		___ notes of 100 taka is equals to ___ taka.
e)		___ notes of 1000 taka is equals to ___ taka.

